




DELHI PUBLIC SCHOOL CIVIL LINES ALIGARH

Session 2023-24

Class- VII

HOLIDAY HOMEWORK



ENGLISH-

1. Read any one of the below given novel:
 - a) The Magic of the lost temple – Sudha Murthy
 - b) The Invisible boy-Trudy Ludwig
 - c) The House of strange stories – Ruskin Bond
2. Write an essay on any one of the topic given:
 - a) Safety of Environment – Our responsibility
 - b) Your favourite Historical Monument
 - c) Sports and it's importance
3. Maintain dictionary based on your reading of the novel.

Note:- All the writing section must be maintained in a scrapbook/ file.



HINDI-

- 1 -हिमालय से निकलने वाली मुख्य नदियों के चित्र लगाएं तथा उनके नाम, उदगम स्थान लिखते हुए जिन शहरों से होकर वे गुजरती हैं, उनका भी उल्लेख करें।
- 2-प्रतिदिन समाचार पत्र पढ़ें एवम् समाचार पढ़ने के उपरांत खेल संबंधित किंही दस घटनाओं का वर्णन करके लिखें। (साथ में कटिंग भी लगाएं)

MATHS-



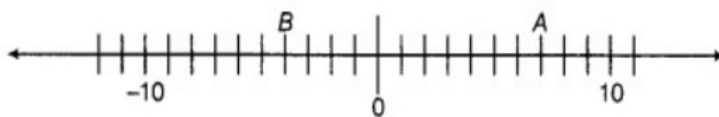
Edit with WPS Office

NOTE:- DO ALL HOLIDAY HOMEWORK IN SEPARATE SMALL COPY

1. When the integers 10, 0, 5, -5, -7 are arranged in descending or ascending order, then find out which of the following integers always remains in the middle of the arrangement.

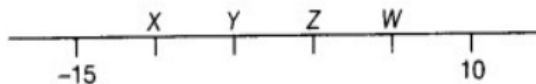
- (a) 0 (b) 5 (c) -7 (d) -5

2. By observing the number line, state which of the following statements is not true?



- (a) B is greater than -10 (b) A is greater than 0
(c) B is greater than A (d) 6 is smaller than

3. On the following number line value, 'zero' is shown by the point

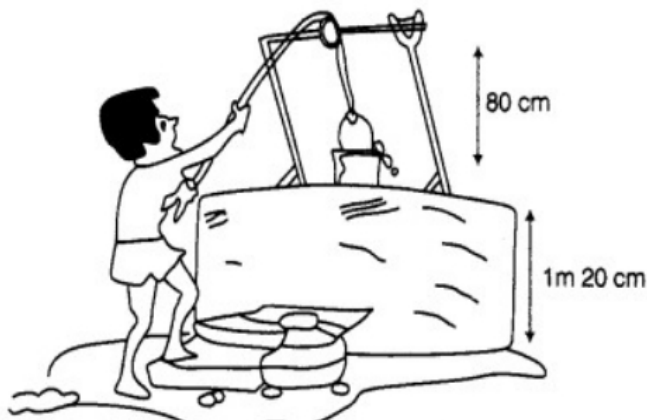


- (a) X (b) Y (c) Z (d) W

4. The value of $5 + (-1)$ does not lie between

- (a) 0 and -10 (b) 0 and 10 (c) -4 and -15 (d) -6 and 6

5. Water level in a well was 20 m below ground level. During rainy season, rainwater collected in different water tanks was drained into the well and the water level rises 5 m above the previous level. The wall of the well is 1m 20cm high and a pulley is fixed at a height of 80 cm. Raghu wants to draw water from the well. The minimum length of the rope, that he can use is

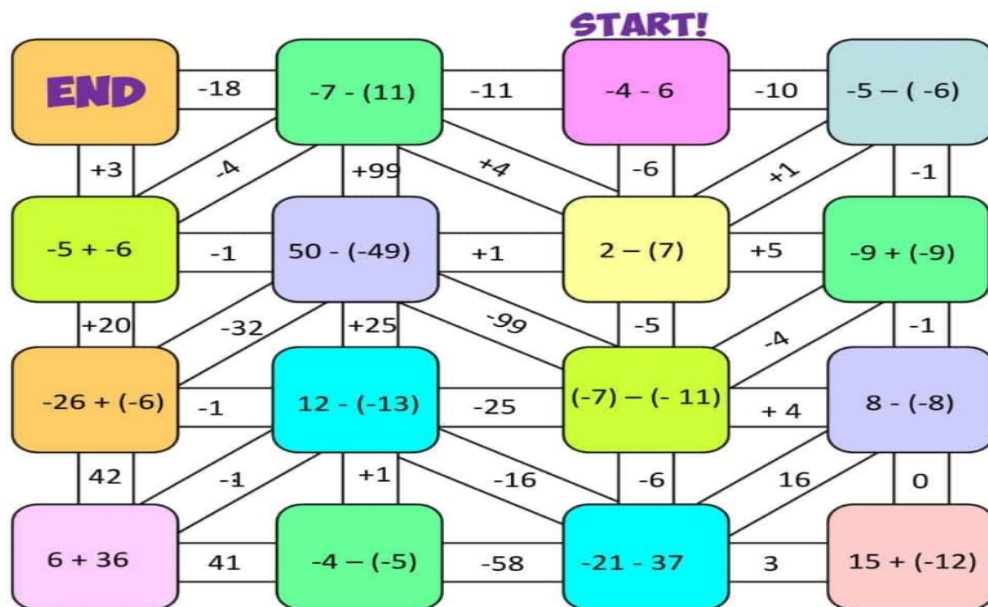


- (a) 17 m (b) 18 m (c) 96 m (d) 97 m



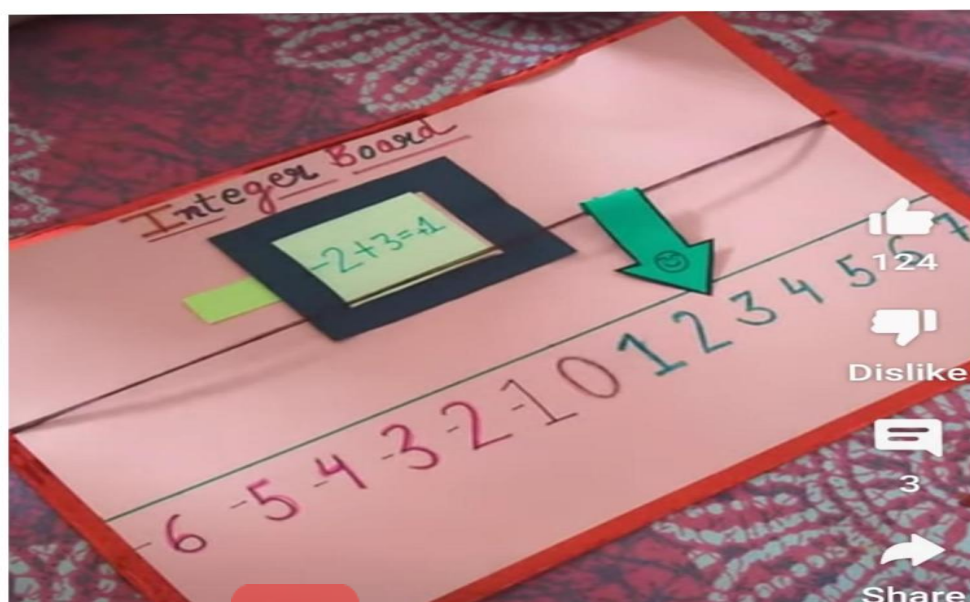
ACTIVITY TIME

ACTIVITY NO 1

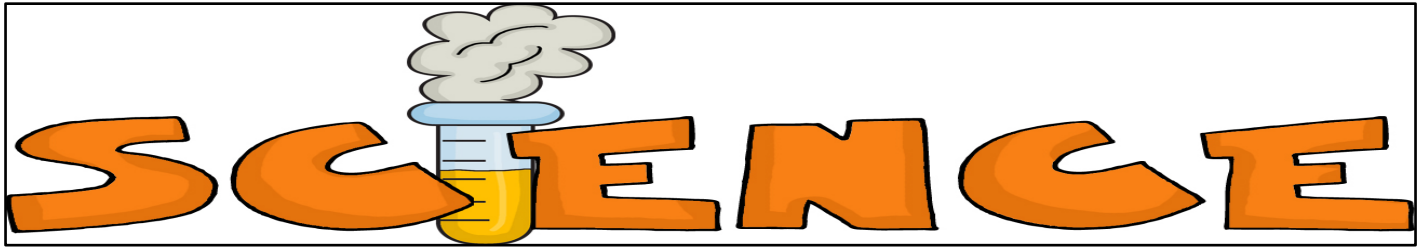


Activity No 2
Make an integer board

https://youtube.com/shorts/_QQAx5Z-gnE?feature=share



Edit with WPS Office



SCIENCE-

1. During different times of the year, we see various birds visiting our neighborhood. Many people enjoy watching them and known as bird watchers but people who study them are known by a different name. What are these people called? Name a few of them.
2. Some birds travel to very far off places in order to survive. What is this called? Name 10 birds which do so. Collect information and pictures to prepare a colorful scrapbook.

OR

There are many scientists who have brought about a revolutionary change. Name 5 scientists. Paste their pictures and write a few lines on their contributions in the scrap book.

3. Prepare a chart showing 4 different types of thermometer (with diagrams) along with their applications.



SOCIAL SCIENCE-

Prepare an assignment on chola empire containing unknown facts about chola empire

Ms.Shahnaz khan
Singh
Class Representative
Principal

Mr. Devashish Dasgupta
Coordinator

Mr. Sharad Agrawal
Vice Principal

Ms. Rajani



Edit with WPS Office